

**1)** Measure the perimeter of each shape.



Shapes not to scale.

Perimeter =

Shapes not to scale.

Perimeter =

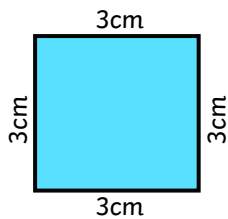
**2) Measure the perimeter of each shape.**

Perimeter =

1) Bryn has measured the perimeter of each shape, but has made some mistakes.

- Which measurements are correct? Which are incorrect?
- If incorrect, what is the correct perimeter?

**a)** Perimeter = 9cm

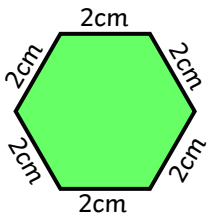


Correct

Incorrect

---

**b)** Perimeter = 12cm

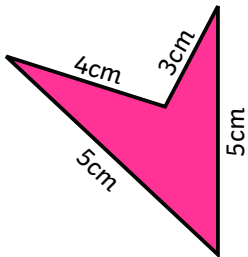


Correct

Incorrect

---

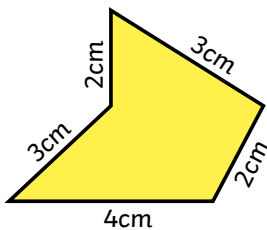
**c)** Perimeter = 17cm



Correct

Incorrect

**d) Perimeter = 18cm**



Correct

Incorrect

Show your working out.

[illegible]

Shapes not to scale.

**2) Jamie is measuring the perimeter of a rectangle.**



I only need to measure  
the two longest sides.



Do you agree? Explain your reasons.

---

---

---