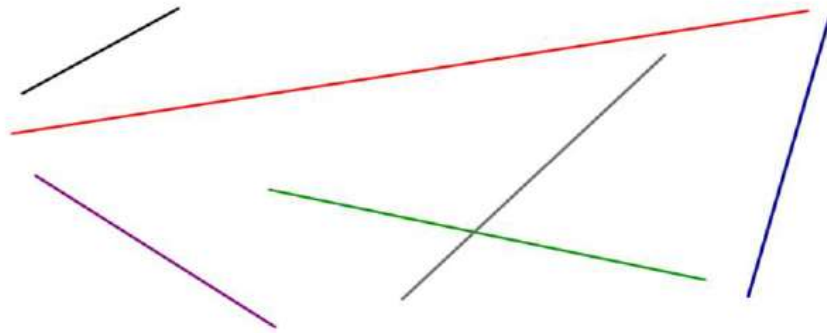




Practise:

1.

Measure the lines to the nearest centimetre.  
Can you measure the lines in millimetres?



If you cannot print this sheet then ask a member of your family to draw some lines for you to measure!

2.

What unit of measurement would you use to measure these real life objects? Millimetres, centimetres or metres?

Fingernail

Eraser

Pencil

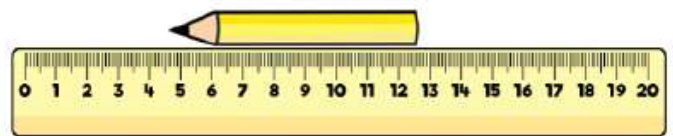
Height of a  
house

Length of a  
playground

Length of a  
table

3.

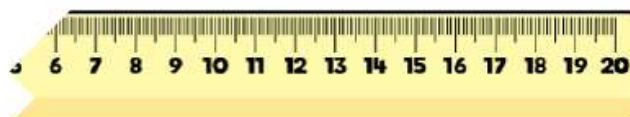
What is the length of each pencil?



Reason:

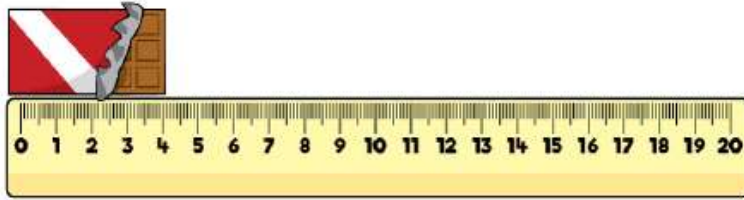
4.

Whitney's ruler is broken.  
How could she use it to still measure items?



5.

Tommy thinks that this chocolate bar is 4 cm long.  
Is he correct?



Convince me.

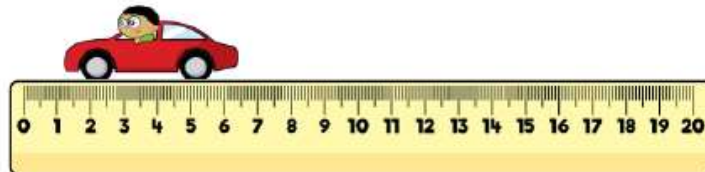


**Problem Solve:**

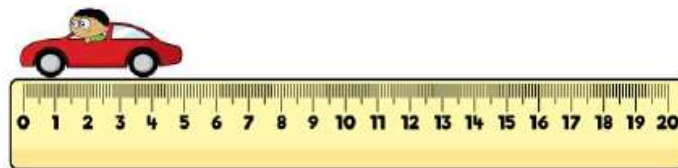
6.

Three children measured the same toy car.

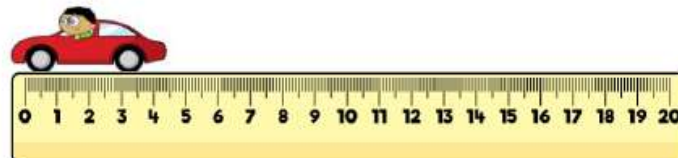
Eva says that the car is 6 cm and 5 mm



Dexter says the car is 5 cm



Annie says the car is 4 cm 5 mm



Who is correct?  
Who is incorrect?  
Explain why.