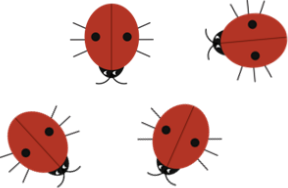






Year 3 Securing Maths Skills Sheet 9



Task	Monday	Tuesday	Wednesday	Thursday	Friday
Partition the number into 100s, 10s and 1s.	347	621	405	515	870
Complete the calculations.	$57 - 30 =$	$43 - 22 =$	$65 - 15 =$	$72 - 44 =$	$37 - 19 =$
Complete the calculations.	$7 \times 5 =$	$45 \div 5 =$	$5 \div 5 =$	$0 \times 5 =$	$60 \div 5 =$

Circle one quarter.					
Draw the coins to show the amount using the fewest coins possible.	75p	£1 and 50p	£3 and 40p	£2 and 68p	£4 and 85p
Draw on the vertical line of symmetry.	