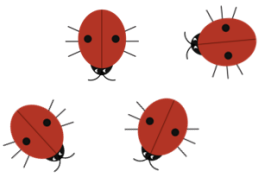











Year 3 Securing Maths Skills Sheet 8



Task	Monday	Tuesday	Wednesday	Thursday	Friday
Write the number shown.					
Complete the calculations.	$55 + 31 =$	$26 + 42 =$	$47 + 33 =$	$75 + 18 =$	$47 + 29 =$
Complete the calculations.	$7 \times 10 =$	$90 \div 10 =$	$0 \times 10 =$	$10 \div 10 =$	$120 \div 10 =$

Circle half.					
Tick the coins needed to make the given amount.	63p 	50p 	£5 and 30p 	£1 and 57p 	£11 and 15p 
Count the vertices.	