





Describe how you think these different coastal areas were formed.



Neist Point, Skye



St. Michael's Mount, Cornwall



Chesil Beach, Dorset

erosion landform
deposits

deposition landform
sediment cliffs

waves
beach

wind