






Wednesday 26th January 2021

-To use division to solve problems.

Practice

-  Mrs Forbes has saved £4,960
She shares the money between her 15 grandchildren.
How much do they each receive?
-  Modelling clay is sold in two different shops.
Shop A sells four pots of clay for £7.68
Shop B sells three pots of clay for £5.79
Which shop has the better deal?
Explain your answer.
-  A box of chocolates costs 4 times as much as a chocolate bar.
Together they cost £7.55
- 
- How much does each item cost?
How much more does the box of chocolates cost?

Reasoning

Each division sentence can be completed using the digits below.



$$\square . 3 \div \square = 0.26$$

$$12 . \square \div \square = 4.2$$

$$4 . \square 8 \div \square = 1.07$$

Problem Solving

Jack and Rosie are both calculating the answer to $147 \div 4$

Jack says,



The answer is 36
remainder 3

Rosie says,



The answer is 36.75

Who do you agree with?