

Tuesday's Maths Sheet

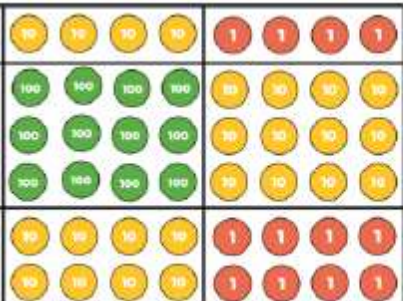

Learning Objective: Multiply 2digits by 2 digits

Your Maths Pack has a number of resources that will help you. The 'Place Value Headings' sheet is useful, there should also be some dice in the pack.

Please complete at least 5 minutes on Times Tables Rockstars and also play https://www.transum.org/Software/Fast_Factors/Default.asp 'Fast Factors' to improve your times table recall even more.

Practise

1. Here are 2 ways of calculating 44×32 . Which method do you prefer and why?

\times		
40	1,200	120
4	80	8

2. Use dice to create 5 more 2×2 calculations and use the grid method to answer them.

Reasoning and Problem Solving

3.

Eva says,







To multiply 23 by 57 I just need to calculate 20×50 and 3×7 and then add the totals.

What mistake has Eva made?

Explain your answer.

4.

Amir hasn't finished his calculation. Complete the missing information and record the calculation with an answer.

\times	40	2
40		
6		

Answers

Reasoning and Problem Solving

3.

Eva's calculation does not include 20×7 and 50×3

4.

Amir needs 8 more hundreds, $40 \times 40 = 1,600$ and he only has 800

His calculation is

$$42 \times 46 = 1,932$$