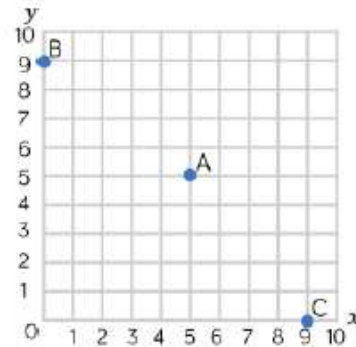


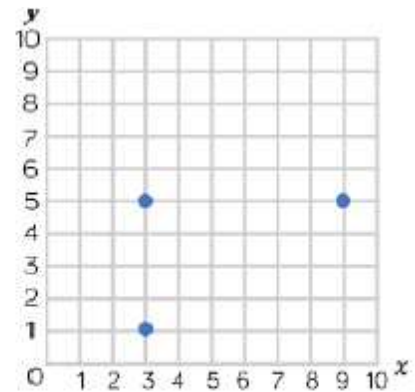
Monday 11th January 2021.

Coordinates

Whitney plots three coordinates.
Write down the coordinates of
points A, B and C.

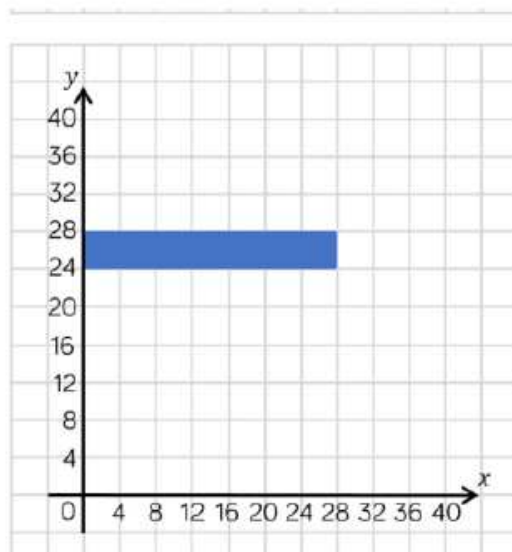


Tommy is drawing a rectangle on a grid.
Plot the final vertex of the rectangle.
Write the coordinate of the final
vertex.



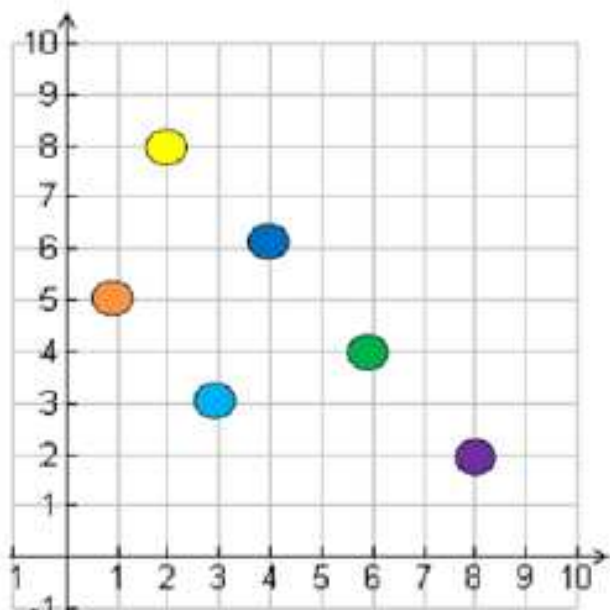
What are the coordinates
of the vertices of the
rectangle?

(,)	(,)
(,)	(,)



Monday 11th January 2021.

- Beth draws a map of her town.



Key: ● My house ● School
● Shop ● Cinema
● Park ● Ice rink

What is at these co-ordinates?

- a) (3,3) b) (6,4)