

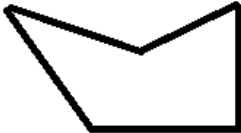
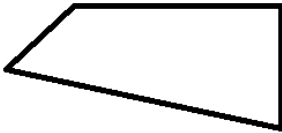
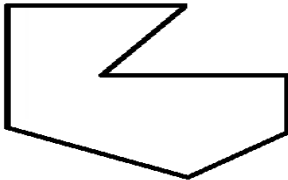


Year Three Securing Skills Test 4



Task:	Monday	Tuesday	Wednesday	Thursday	Friday
Complete the subtraction	$\begin{array}{r} 276 \\ -158 \\ \hline \end{array}$	$\begin{array}{r} 352 \\ -138 \\ \hline \end{array}$	$\begin{array}{r} 425 \\ -286 \\ \hline \end{array}$	$\begin{array}{r} 368 \\ -293 \\ \hline \end{array}$	$\begin{array}{r} 373 \\ -280 \\ \hline \end{array}$
Write in words:	638	426	205	713	559
Write the fraction that is shaded:					

Subtract 10	256	305	183	219	104
Circle the right angles on these shapes					
Write the next two numbers in the sequence:	64, 60, 56 ...	500, 450, 400...	60, 57, 54 ...	700, 800, 900 ...	72, 64, 56 ...