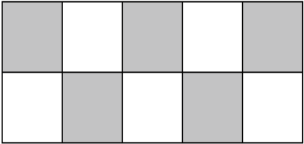
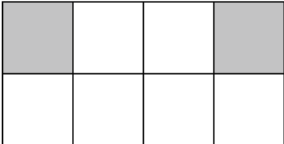
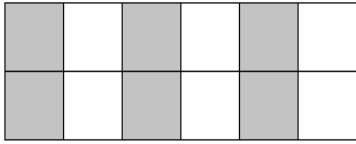
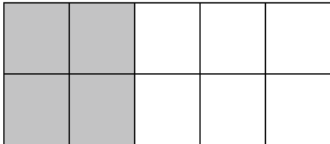
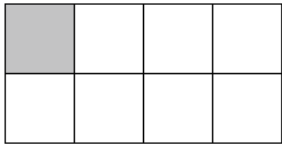


Year Three Securing Skills Sheet 2



Task:	Monday	Tuesday	Wednesday	Thursday	Friday
Calculate	$\begin{array}{r} 183 \\ -123 \\ \hline \end{array}$	$\begin{array}{r} 268 \\ -149 \\ \hline \end{array}$	$\begin{array}{r} 227 \\ -173 \\ \hline \end{array}$	$\begin{array}{r} 359 \\ -284 \\ \hline \end{array}$	$\begin{array}{r} 374 \\ -168 \\ \hline \end{array}$
Put these in order from smallest to largest	372 327 732 237 273	281 821 182 218 128	625 562 265 652 526	194 419 941 149 491	808 708 870 780 807
Calculate	$24 \div 4$	$32 \div 8$	$33 \div 3$	$60 \div 5$	$36 \div 4$

Write the next two numbers in the sequence	10, 14, 18	13, 18, 23	25, 22, 19	54, 49, 44	28, 37, 46
Write the fraction of the shape that is shaded					
Write how many:	Seconds in a minute	Minutes in an hour	Hours in a day	Days in a week	Weeks in a year