









One day, Iron Man and the Hulk are arguing over which of the avengers is truly the greatest; so they decide to collect some data.

In this booklet you'll find information about all the Avengers. It's your task to find the mean for each skill; any avenger who has a HIGHER score for that skill than the average should get a medal.

	Strength	Cunning	Speed	Trickery	Intellect
 <p>The Hulk</p>	10	3	5	3	7
 <p>Iron Man</p>	8.5	8	10	9	10
 <p>Captain America</p>	9.5	5	9.5	5	6
 <p>Thor</p>	9.5	6	9	8	5
 <p>Black Widow</p>	8	10	7	9.5	9.5
 <p>Hawkeye</p>	6	3	7	8.5	6

## Mean of Strength

Working Out Box

Answer:\_\_\_\_\_

## Mean of Cunning

Working Out Box

Answer:\_\_\_\_\_

## Mean of Speed

Working Out Box

Answer:\_\_\_\_\_

## Mean of Trickery

Working Out Box

Answer:\_\_\_\_\_
































## Mean of Intellect

Working Out Box

Answer:\_\_\_\_\_

## Medal Table

Colour in a medal of the avenger gets one for that skill

	Strength	Cunning	Speed	Trickery	Intellect
 The Hulk					
 Iron Man					
 Captain America					
 Thor					
 Black Widow					
 Hawkeye	