

# Maths Activity 3






Practise:




1.

Complete the calculations using place value counters.

$$372 - 145$$

H	T	O
		

$$629 - 483$$

H	T	O
		

2.

Complete the column subtractions showing any exchanges.

	H	T	O
	6	8	3
–	2	3	4

	H	T	O
	2	3	4
–	1	9	5

	H	T	O
	5	0	7
–	4	5	1



Reason:

3.

Eva is working out  $406 - 289$

Here is her working out:

Step 1	Step 2
$\begin{array}{r} \overset{3}{\cancel{4}}0\overset{1}{6} \\ - 289 \\ \hline \phantom{0}7 \end{array}$	$\begin{array}{r} \overset{2}{\cancel{4}}\overset{1}{0}\overset{1}{6} \\ - 289 \\ \hline 027 \end{array}$

Explain her mistake.

What should the answer be?



Problem Solve:

4.

Work out the missing digits.

	H	T	O
	5	?	3
—	2	1	8
	3	1	5

	H	T	O
	?	0	?
—	2	?	8
	2	4	6